


Prep for Basic Chemistry

Classification of Chemical Reactions

Name _____ Date _____

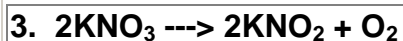
Identify the following chemical equations by type: Combustion (C), Decomposition (D), Double replacement (DR), Single displacement (SD), or Synthesis (S)



Circle type C D DR SD S



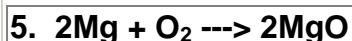
Circle type C D DR SD S



Circle type C D DR SD S




Circle type C D DR SD S



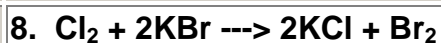
Circle type C D DR SD S



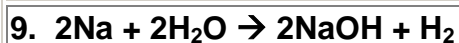
Circle type C D DR SD S



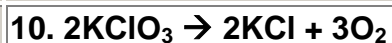
Circle type C D DR SD S



Circle type C D DR SD S



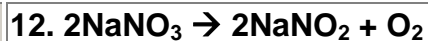
Circle type C D DR SD S



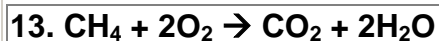
Circle type C D DR SD S



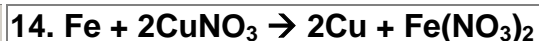
Circle type C D DR SD S



Circle type C D DR SD S



Circle type C D DR SD S



Circle type C D DR SD S